

# Oe laptettum?

Los de rekenraadsels op!

$$\begin{array}{c}
 \text{Calf} \times \text{Pig} = \text{Calf} \times \text{Calf} \\
 \times \quad \times \quad = \quad \times \quad \times \quad =
 \end{array}$$







$$\begin{array}{c}
 \text{Calf} \times \text{Horse} = \text{Chicken} \times \text{Horse} \\
 \times \quad \times \quad = \quad \times \quad \times \quad =
 \end{array}$$

$$\begin{array}{c}
 \text{Lamb} \times \text{Lamb} = \text{Lamb} \times \text{Pig} \\
 \times \quad \times \quad = \quad \times \quad \times \quad =
 \end{array}$$

$$\begin{array}{c}
 \text{Calf} \times \text{Chicken} = \text{Lamb} \times \text{Horse} \\
 \times \quad \times \quad = \quad \times \quad \times \quad =
 \end{array}$$

$$\begin{array}{c}
 \text{Chicken} \times \text{Chicken} = \text{Calf} \times \text{Lamb} \\
 \times \quad \times \quad = \quad \times \quad \times \quad =
 \end{array}$$



	=1		=4
	=2		=5
	=3		=6